

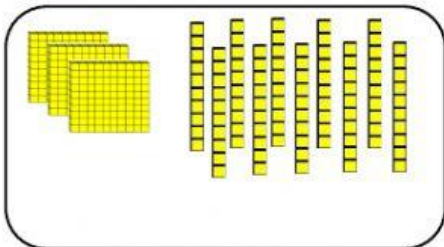
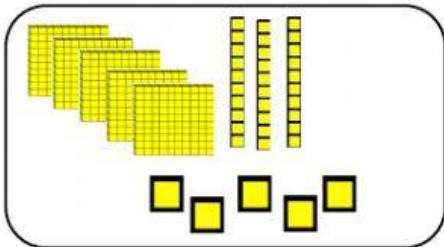
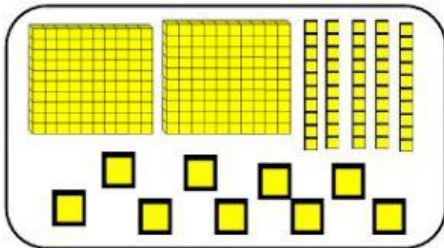
Quiz

Name :

Class : 2

Good Luck !

A. Draw a line that matches the question to the right answer!



7 hunddreds
5 tens
8 ones

•

5 hunddreds
6 tens
7 ones

•

•

758

•

400

•

259

•

567

•

535

B. Answer the question with the correct answer!

1. $123 + 321 = \underline{\hspace{2cm}}$

2. $627 + 110 = \underline{\hspace{2cm}}$

3. $797 - 457 = \underline{\hspace{2cm}}$

4. $670 - 209 = \underline{\hspace{2cm}}$

5. 345 people watched the tournament on Saturday.

There were 209 more people watching the tournament on Sunday than Saturday.

How many people watched the tournament on Sunday?

Answer :

6. Lia bought 150 ping-pong balls.

Then her friend brought 115 ping-pong balls.

How many ping-pong balls now?

Answer :

7. There were 793 people in mall.

570 people were women.

How many people were men?

Answer :

8.



$\underline{\hspace{2cm}} \times \underline{\hspace{2cm}} = \underline{\hspace{2cm}}$

9.



$$\underline{\hspace{2cm}} \times \underline{\hspace{2cm}} = \underline{\hspace{2cm}}$$

10. $4 \times 7 = \underline{\hspace{2cm}}$