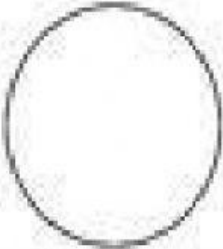


Name: _____

How Many Sides?


Count the sides of each shape and circle the correct number.

circle




1	0	2
---	---	---

square



2	3	4
---	---	---

triangle




3	1	2
---	---	---

rectangle




4	2	5
---	---	---

diamond




2	5	4
---	---	---

oval



0	1	2
---	---	---

Let's Look   **and Write** 



1. **Andy:** How many squares are there?

Sindy: There are _____ squares.

2. **Andy:** How many circles are there?

Sindy: _____.

3. **Andy:** How many rectangles are there?

Sindy: _____.

4. **Andy:** How many triangles are there?

Sindy: _____.