






Movement

Grade 3

Name:

Date:

Fill in the boxes.

					
	Jack				bank
					
		cafe			museum
					
		home			

Jack is facing the bank.
He wants to follow the path.

2

3

quarter

forward

clockwise

anti-clockwise

- Jack moves 4 squares _____ to go to the bank.
- Then, he makes a _____ turn clockwise and moves _____ squares forward to go to the museum.
- Then, he makes a quarter turn _____ and moves 3 squares forward to go to the cafe.
- Then, he makes a quarter turn _____ and moves _____ squares forward to go to the home.

