

Assessment 2 Topic: Shapes / Recognise 3D shapes

Name: _____

Day: _____

Class: _____

Date: _____

(b) Fill in the blanks.

1.



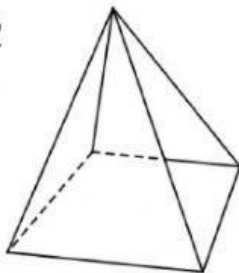
This is

pyramid

cylinder

It has _____ flat faces and _____ curved face.

2.



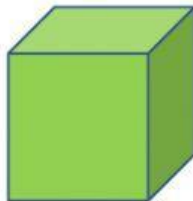
This is

pyramid

cylinder

It has _____ flat faces and _____ vertices.

3.



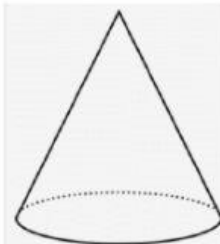
This is

cube

cuboid

It has _____ flat faces and _____ vertices.

4.



This is

sphere

cone

It has _____ vertex, _____ curved face and
_____ flat faces.

5.



This is

cube

cuboid

It has _____ vertices and _____ flat faces.