

Assessment 1

Topic: Shapes / Recognise 3D shapes

Name: _____

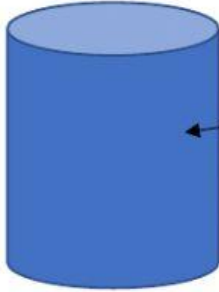
Day: _____

Class: _____

Date: _____

Choose the correct answer the parts for the following 3-D shapes.

1.



curved face

Flat face

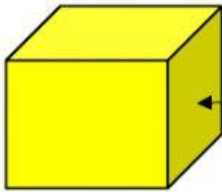
2.



Straight edge

vertex

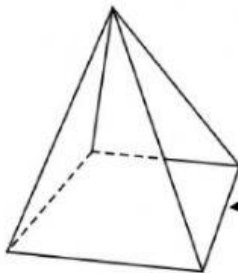
3.



Flat face

Curved face

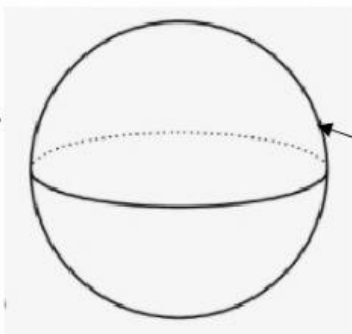
4.



vertex

Straight edge

5.



Curved face

Straight edge