

1. Which is shorter?



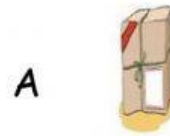
A B

2. Which is taller?



A B

3. Which is longer?




A




B

Look at the objects and measure.

Toothpick cm



Crayon cm



Battery cm



Clip cm



4. Which item is the longest?

5. Which items are the same length?

6. Arrange the toothpick, crayon, and clip from shortest to longest.

7. Which unit is the best to measure a jet?

8. A pencil is 8 cm long. An umbrella is 17 cm long. How much shorter is the pencil than the umbrella?

9. Choose the correct number sentence.

A tree is 5m tall. A lamppost is 2m tall. How much taller is the tree than the lamppost.

10. Which word problem matches the number sentence:

$$9 + 6$$

A blue ribbon is 9 cm long. A green ribbon is 6 cm longer. How long is the green ribbon?

A blue ribbon is 9 cm. A green ribbon is 6 cm. How much longer is the blue ribbon?

A blue ribbon is 9 cm. A green ribbon is 6 cm shorter. How long is the green ribbon?