

Name: _____

Grade: 11 _____

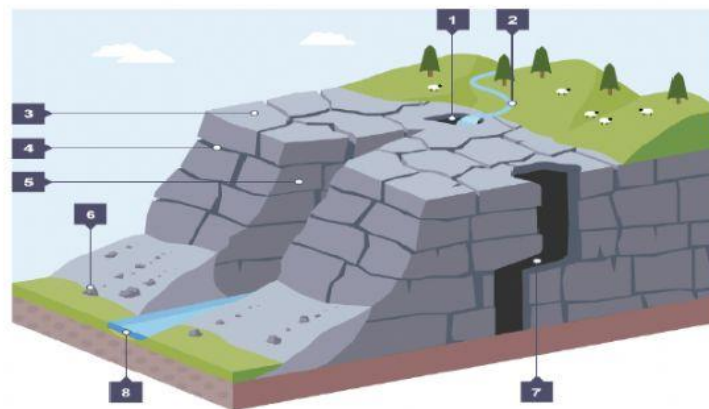
Date: _____

Subject: Geography

Topic: **Limestone Features**

Instructions: Label the various diagrams below with the name of the correct limestone features.

cave	pillar	swallow hole	Speleology
Limestone pavement	clints	gorge	stalactites
grykes	karrens	stalagmites	drip features

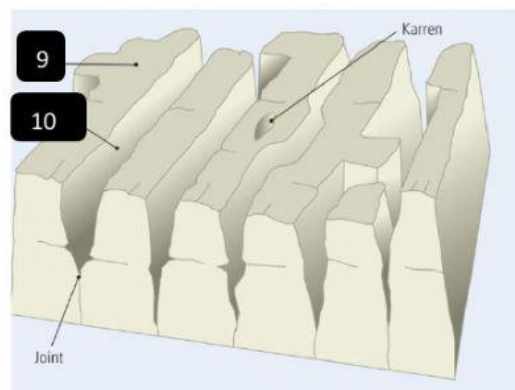


1 _____

3 _____

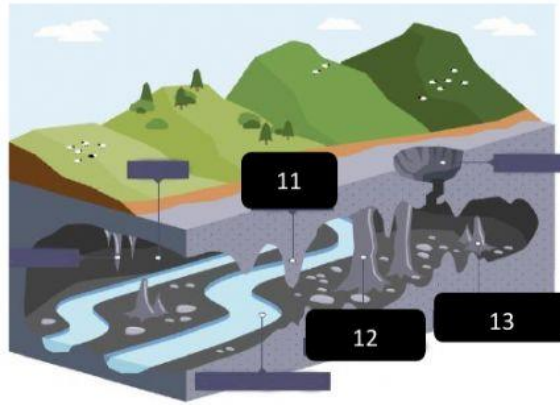
5 _____

7 _____



9 _____

10 _____



11 _____

12 _____

13 _____

14. The study of caves exploration is called _____.