



Spring Hill International School

Quiz no.12

Scholastic Year 2020/ 2021

Student's Name:

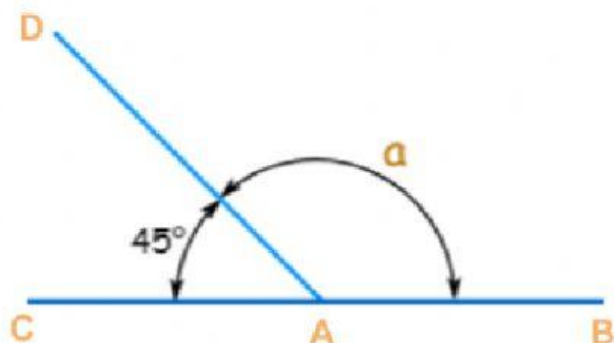
Class & Section: Grade 6

Teacher's Name: Raghda Ziad

Subject: Math / Checkpoint

Date: 22/ Dec. / 2020

Question no.1 :



A) What is the type of angle CAD?

B) Calculate the size of angle a (BAD):

Question 2 : Sort the following into the correct place on the Carroll Diagram

Acute angle

Right angle

Reflex angle

Obtuse angle

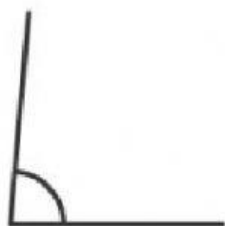
None

	Less than 90 degrees	Bigger than 90 degrees
Less than 180 degrees		
Bigger than 180 degrees		

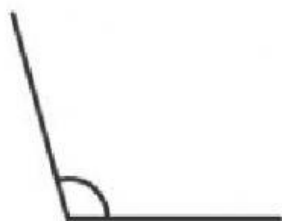
Question no.3 :

Estimate the size of the angles.

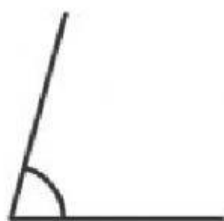
(a) Tick (✓) the angle which is about 25° .

☐☐☐

(b) Tick (✓) the angle which is about 45° .

☐☐☐

(c) Tick (✓) the angle which is about 75° .

☐☐☐

(d) Tick (✓) the angle which is about 90° .

☐☐☐