




ให้หาผลบวก




$$5 + 2 = \square$$




$$2 + 2 = \square$$




$$5 + 3 = \square$$



$$4 + 1 = \square$$



$$6 + 3 = \square$$



$$2 + 1 = \square$$