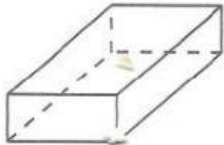


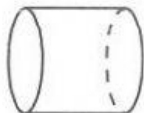
Naming Solid Shapes

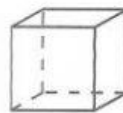
1 Write the name next to each shape.

cube cone cylinder sphere rectangular prism pyramid






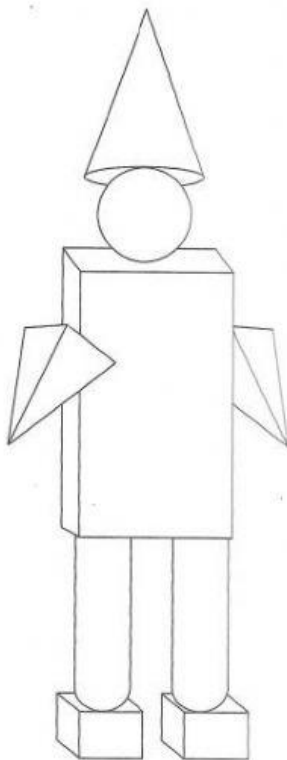








2 Colour the shapes so that all the same shapes are the same colour.



3 Count the shapes.
Write how many there are of each.

cubes _____

cones _____

cylinders _____

spheres _____

rectangular prisms _____

pyramids _____