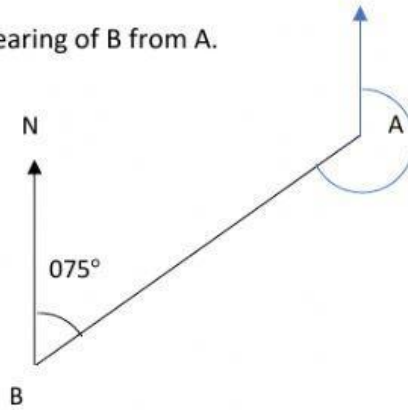


Exercise

Name:- _____

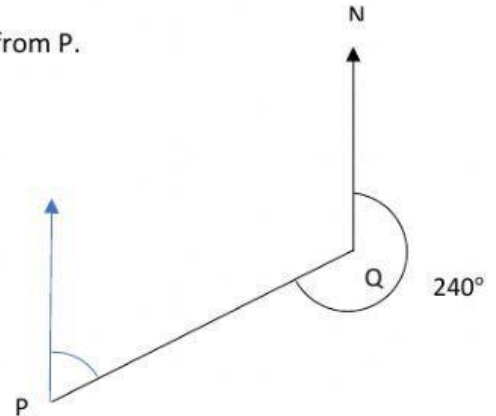
- 1) The bearing of A from B is 075° Find the Bearing of B from A.

Bearing of B from A is _____ $^\circ$



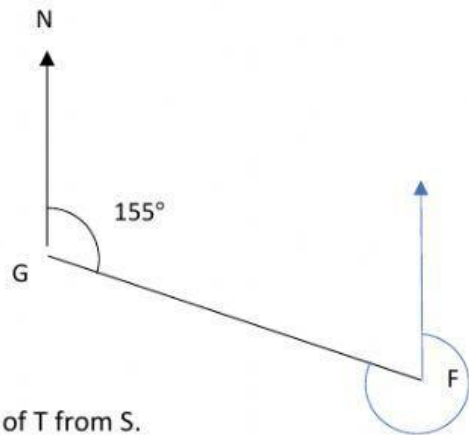
- 2) The bearing of P from Q is 240° Find the Bearing of Q from P.

Bearing of Q from P is _____ $^\circ$



- 3) The bearing of F from G is 155° Find the Bearing of G from F.

Bearing of G from F is _____ $^\circ$



- 4) The bearing of S from T is 302° Find the Bearing of T from S.

Bearing of T from S is _____ $^\circ$

