

Topic : Length, Mass, and Volume of Liquid

Convert Units of Length

Drag and put the Correct Answers:

1) 1 centimetre equals to .

2) 1 metre equals to .

3) 1 kilometre equals to .

4) 2 metres equals to .

100 centimetres

2000 millimetres

1000 metres


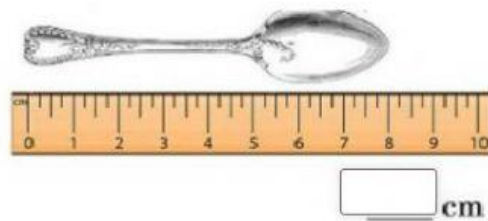
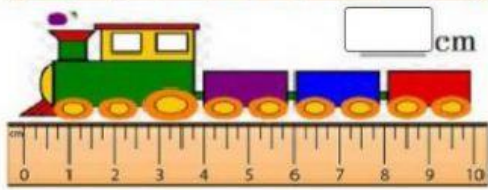
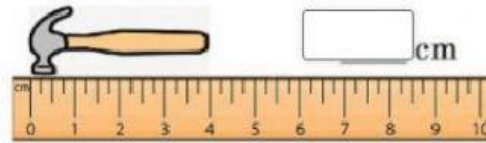
10 millimetres

Underline and match the correct answers:

1.	1 km
2.	50 mm
3.	70 mm
4.	2m
5.	36cm
6.	2km 500m
7.	8 m

360 mm
200 cm
5 cm
7cm
800 cm
2500 m
1000 m

Use the ruler to find the length of each item in cm.



Measure the weight of each object.

