



# KiDiploma

## Mathematics Diagnostic Test


**Levels 1-6**

**Test Duration: 120 minutes**

**Name:** .....

**School:** .....


**ID:** .....



KiDiploma  
LEARNING FOR FUN

**Second Level**

13) How many more than 10 is there in the figure below?



a) 15

b) 5

c) 10

14) Skip count to find the total



a) 25

b) 15

c) 20

15) Which of the following numbers is sixty-nine?

a) 68

b) 96

c) 69

16) How many hundreds are there in the number **109** ?

a) 1

b) 10

c) 19

17) Choose the correct symbol: 93   75.

a)  $<$

b)  $>$

c)  $=$

18) Hamda ate 38 cherries in the first week. She ate 23 cherries in the second week. How many cherries did she eat in the two weeks?



a) 611

b) 15

c) 61

19) Find

tens	ones
5	6
3	0

a) 86

b) 80

c) 26

20) Find


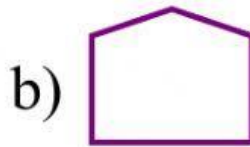

tens	ones
8	3
2	9

a) 112


b) 54

c) 66

21) Which shape has 3 vertices?



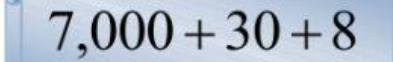
22) Which shape has a face  ?



**Third Level**

23) What is the card with the number having 9 tens and 8 ones?



24) Write the number  in word form.

a) seven thousand  
thirty-eight

b) seven hundred  
thirty-eight

c) seven hundred  
thirty

25) Complete the missing number in the number pattern.

5,692 ; 5,592 ;  ; 5,392

a) 5,492

b) 5,292

c) 5,192

26) Write the value of the highlighted digit 8 in the number 8,705 .

a) 80

b) 8,000

c) 800

27) Find

hundreds	tens	ones
<div><div></div><div>8</div><div>3</div></div>	<div><div></div><div>5</div><div>6</div></div>	<div><div></div><div>6</div><div>8</div></div>

a) 222

b) 518

c) 488

28) Each box has 6 cakes in it.

How many cakes are there in 5 boxes?

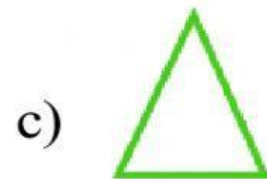



a) 30


b) 24

c) 36

29) Which of the following is an acute triangle?



30) Find the area of the rectangle



in square units.

a) 15

b) 22

c) 12