



Name: \_\_\_\_\_ Grade 3 \_\_\_\_\_

Find the area of the given shapes




Area = 12 + \_\_\_\_\_

Area = \_\_\_\_\_



Area = 36 + \_\_\_\_\_

Area = \_\_\_\_\_



Area = 24 + \_\_\_\_\_

Area = \_\_\_\_\_