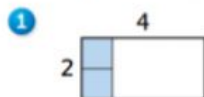
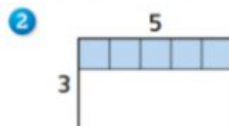


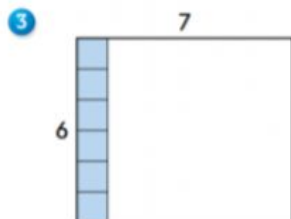
Use the shaded composite unit to find the area of each rectangle.



Area: _____ square units




Area: _____ square units



Area: _____ square units

- 4 Shade a composite unit that you can use to find the area of this rectangle.
You may need to partition a row or a column.



Area: _____ square units