











Use the diagram below to answer questions

 75g	 125g	 120g	 750g	 10g
 150g	 100g	 250g	 50g	 900g

1. Farmer Clarke ordered 8 pineapples from the market.

a. What is the mass of the bag of pineapples in kilograms

Kilograms

2. Grandma bought 3 cauliflower and 4 broccoli. What would be the total mass in kilograms?

Kilograms

3. Mr Green ordered 6 oranges and 6 bananas? What would be the mass in kilograms?

kilograms