



Write the **addition fact** and the **multiplication fact** for the following:



$$\underline{\quad} + \underline{\quad} + \underline{\quad} + \underline{\quad} = \underline{\quad}$$

and $\underline{\quad} \times \underline{\quad} = \underline{\quad}$




$$\underline{\quad} + \underline{\quad} = \underline{\quad}$$

and $\underline{\quad} \times \underline{\quad} = \underline{\quad}$



$$\underline{\quad} + \underline{\quad} + \underline{\quad} = \underline{\quad}$$

and $\underline{\quad} \times \underline{\quad} = \underline{\quad}$




$$\underline{\quad} + \underline{\quad} = \underline{\quad}$$

and $\underline{\quad} \times \underline{\quad} = \underline{\quad}$



$$\underline{\quad} + \underline{\quad} = \underline{\quad}$$

$$\underline{\quad} \times \underline{\quad} = \underline{\quad}$$



$$\underline{\quad} + \underline{\quad} + \underline{\quad} + \underline{\quad} = \underline{\quad}$$

$$\underline{\quad} \times \underline{\quad} = \underline{\quad}$$