



Unit 3: Shapes

Revision of unit 3

Comment



- recognize and name 2D shapes.
- name the shapes of objects around us.
- recognize and name 3D shapes.

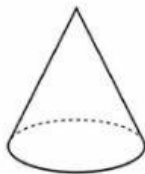
1. Complete.

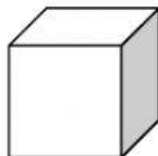
cube


cuboid


cone

cylinder

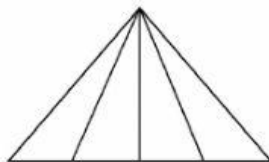




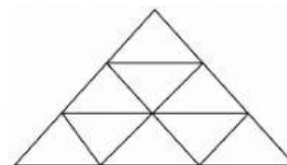




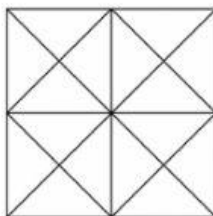
2. How many?



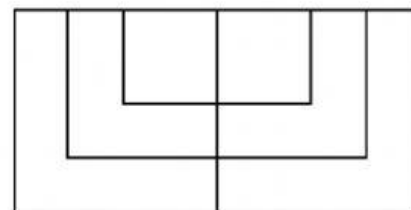
_____ triangles



_____ triangles



_____ squares




_____ squares

3. Match.



• cube



• square



• rectangle



• cone



• cuboid



• hexagon