







Using a map key

Look at the map shown below and answer the questions given after.

A map showing where Peter lives



Key

	Peter's home
	houses
	church
	school
	forest
	road

1. Which road has the most houses where Peter lives?
2. Which building is closest to Peter's home?
3. What is the name of the longest road where Peter lives?

4. What is the name of the biggest forest where Peter lives?
5. What building is north of the church on Smart Road?