



Maurice E. Moore Primary School
Bi-Weekly Assessment #6
Mathematics - Concept

Topics: Even and Odd Numbers, Patterns and Classifying Shapes

Section A: Write if the number is even or odd.

- a. 6 b. 29 c. 42 d. 35

Section B – Direction: Drag and drop the pictures to complete the patterns.



Complete the pattern.

4. 10A 30C

Section C - Name the flat shapes. Tell the number of sides and corners.

SHAPES	NAME OF SHAPE	SIDES	CORNERS


Maurice E. Moore Primary School

Bi-Weekly Assessment #6

Mathematics - Concept

Topics: Even and Odd Numbers, Patterns and Classifying Shapes

Classify the shapes by their color.



Classify the shapes by their size.