


## Skip Count by 2s, 5s, and 10s

Skip count.

Write how many.

1.




2

4

6

\_\_\_\_\_

2.



5

10

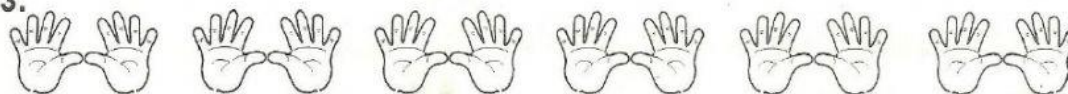
\_\_\_\_\_

\_\_\_\_\_

\_\_\_\_\_

\_\_\_\_\_

3.



10

20

\_\_\_\_\_


\_\_\_\_\_

\_\_\_\_\_


\_\_\_\_\_

### Counting by 2s


a. Find the total number of fish by counting by 2s.




2




4



\_\_\_\_\_



\_\_\_\_\_




\_\_\_\_\_

### Counting by 5s

a. Find the total number of fish by counting by 5s.



5



10



\_\_\_\_\_



\_\_\_\_\_



\_\_\_\_\_