
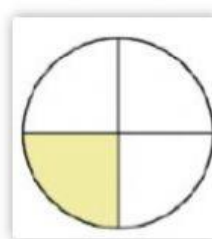

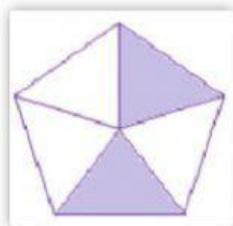


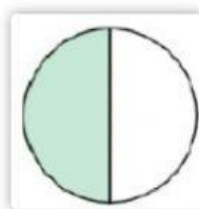


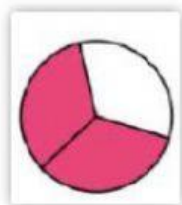


FRAÇÃO

Arraste cada desenho até a sua correspondente:




$$\frac{3}{6}$$

$$\frac{4}{6}$$

$$\frac{4}{9}$$

$$\frac{2}{5}$$

$$\frac{1}{3}$$



$$\frac{3}{4}$$

$$\frac{1}{2}$$

$$\frac{2}{3}$$

$$\frac{1}{4}$$

$$\frac{5}{10}$$