



SERI MULIA SARJANA SCHOOL

Negara Brunei Darussalam

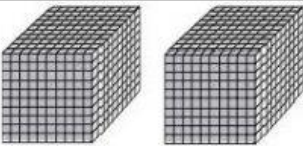













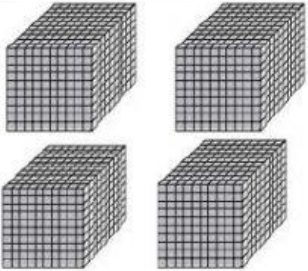






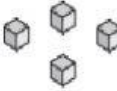

Year 3 - Mathematics

Counting to 10 000

Name : _____

Class : _____ Date : _____

How many  are there?

| | | | | |
|---|---|--|---|---|
| 1.  |  |  |  |  |
| 2.  |  |  |  |  |
| 3.  | |  |  |  |
| 4.  |  | |  |  |
| 5.  |  |  |  |  |

Write the numbers in words.

6. 9684

7. 2840

8. 1276

Match them to the correct pair.

9. Two thousand, three hundred and fifty one

6980

10. Six thousand, nine hundred and eighty

3012

11. Three thousand and twelve

2351

Complete the number patterns.

12. 8840, 8850, , , 8880, 8890

13. 2020, , , 5020, 6020, 7020

What is the number shown on the abacus stand?

