



GIMNASIO INTEGRAL CYGNI DE CARTAGENA

Nit. 900.676.938 – 9

Aprobado por la Secretaría de Educación Distrital mediante Licencia de Funcionamiento, Resolución N°3567 del 13 de agosto de 2020

Código DANE 313001030131

DESARROLLAMOS TALENTO PARA VIVIR UN MUNDO MEJOR

Grade: 4° GRADE

EXAMEN SOCIAL STUDIES 4° PERIODO

NOMBRE: _____ FECHA: _____ NOTA: _____

1. What is the significance of these images?




- a) calm
- b) peace
- c) happy
- d) different

2. How long is a year?



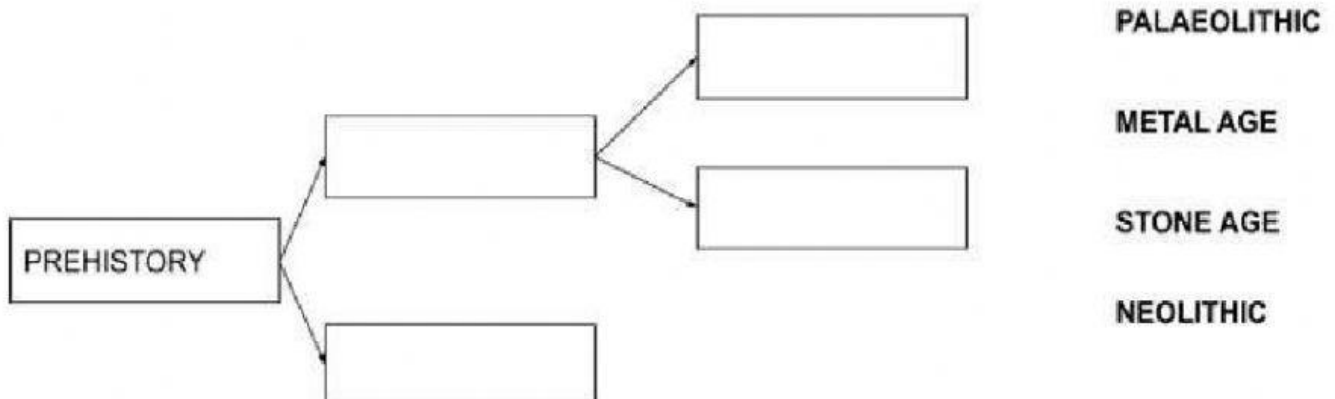
- a) 100 years
- b) 10 years
- c) 12 months
- d) 1000 years

3. **Completed:** According to the chronological organization 100 year is a:





- a) century
- b) year
- c) millennium

4. Drag the words to complete the chart.



5. Write **Paleolithic** or **Neolithic**.



6. Choose the correct option: (**both**: quiere decir ambos)

- They were nomadic:
- They hunted animals and gathered fruits:
- They farmed animals
- They lived in caves:
- They used fire and stone:

7. Answer: this picture represent:



- a) chibchas
- b) caribs
- c) Arawaks

8. **Answer:** which culture represent this picture?



a) chibchas

b) caribs

c) arawaks

9. Write the name of the culture that represent this picture



10. Completed: is the study of the human past using material remains.



Blessings!!



Atte. Miss Mary Cuadros