



# Term 1 Examination

## Subject: SCIENCE

### Year 3

Name:

Date:

**READ THE FOLLOWING INSTRUCTIONS:**

You may use a black OR blue pen

The number of marks is given in brackets [ ] at the end of each question

The total number of marks for this paper is: 50

This document contains 13 pages to be completed

The Australian International School, Laos

9. Look at the picture of habitat. Tick (✓) a box of the correct answer of where are amphibians and reptiles live?

a.  b.  c.  d. 

Frog

a. ☐ b. ☐ c. ☐ d. ☐

Elephant





a. ☐ b. ☐ c. ☐ d. ☐

Whale

a. ☐ b. ☐ c. ☐ d. ☐

[3]

9. Look at the picture of birds. Tick (✓) a box of the correct answer of picture of birds.

a.  b.  c.  d. 

Which birds that cannot fly.

a and b

☐

b and c

☐

a and c

☐

c and d

☐

[1]

10. Look at the picture of animals. Tick (✓) a box of the correct answer of characteristics of animals.



a. mammals

b. birds

c. scorpion

Which animals have beaks?

a. ☐

b. ☐

c. ☐

Which animals have an outer covering of hair or fur?

a. ☐

b. ☐

c. ☐

Which animal is not an insect?


a. ☐

b. ☐

c. ☐

[3]

11. Look at the picture. Tick (✓) a box of the correct answer of which is the vertebrates and invertebrates?



a.

b.

c.

d.

Vertebrates

a and b ☐

b and c ☐

a and c ☐

a and d ☐

Invertebrates

a and b ☐

b and c ☐

a and c ☐

a and d ☐

[2]

12. Look at the picture of plants. . Tick (✓) a box of the correct answer of flowering and non-flowering plant.



Which plant live in water?

a. ☐

b. ☐

c. ☐

d. ☐

Which is non flowering plant?

a. ☐


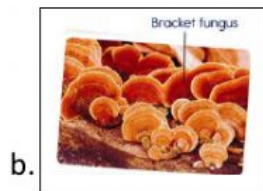
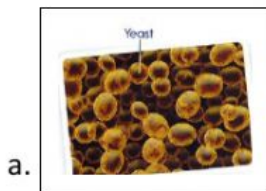
b. ☐

c. ☐

d. ☐

[2]

13. Look at the picture of fungi. Tick (✓) a box of the correct answer of each fungi.



Grow on trees and rotting logs.

a. ☐

b. ☐

c. ☐

d. ☐

Kinds of fungi that can use make bread.

a. ☐

b. ☐

c. ☐

d. ☐

Grow on our food and causes it to spoil.

a. ☐

b. ☐

c. ☐

d. ☐

[3]

14. Look at the picture of bacteria using microscope. Connect each of the correct names to the shape of bacteria.

- Rod-like
- Spiral-shaped
- Spherical



[3]

15. Are all bacteria harmful to humans? Explain your answer.

---

---

---

---

---

---

---

[3]