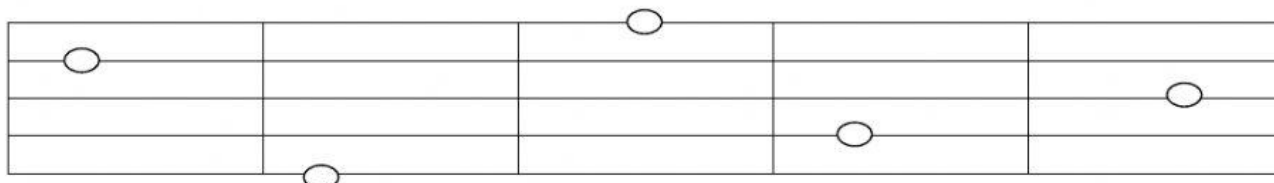
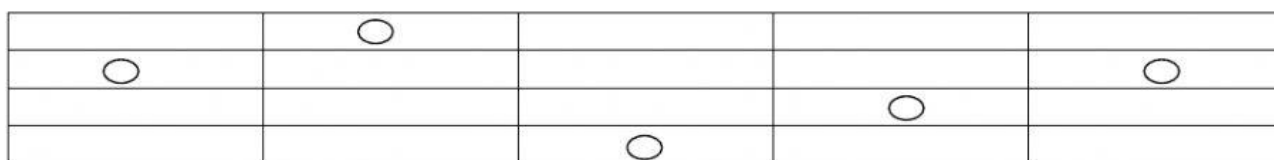


Grace Christian School
MAPEH III Examination
 Month of November

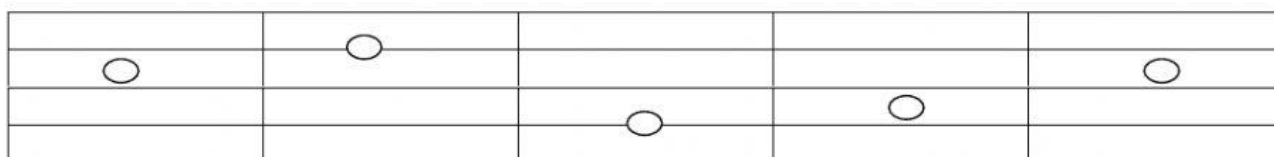
I – Determine the ordinal numbers of the notes written on the line.

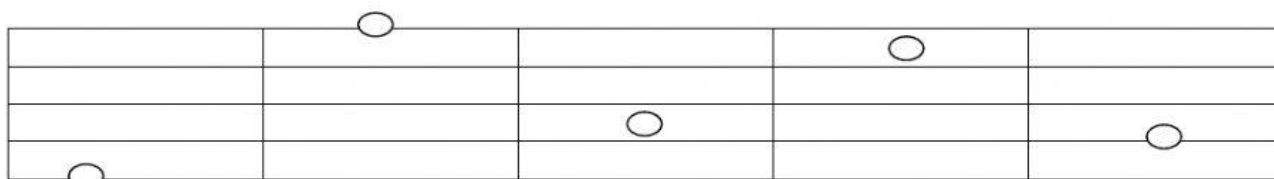


II – Determine the ordinal numbers of the notes written on the space.



III – Choose line or space where the notes are written.





IV – Identify the following colors if it is primary, secondary or intermediate colors.

_____ 1. red-orange

_____ 2. blue-violet

_____ 3. green

_____ 4. yellow

_____ 5. blue-green

_____ 6. red-violet

_____ 7. yellow-green

_____ 8. red

_____ 9. orange

_____ 10. yellow-orange

_____ 11. blue

_____ 12. violet