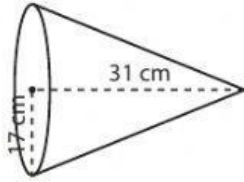


Name : \_\_\_\_\_

Score : \_\_\_\_\_

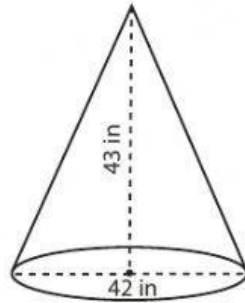
**Volume - Cone**Find the volume of each cone. Round the answer to nearest tenth. ( use  $\pi = 3.14$  )

1)



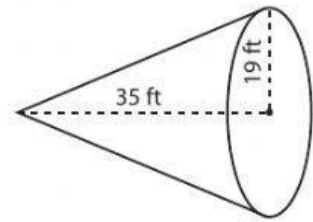
Volume = \_\_\_\_\_

2)



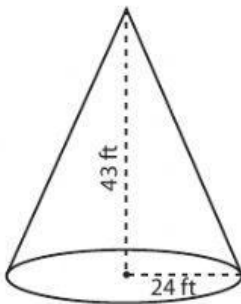
Volume = \_\_\_\_\_

3)



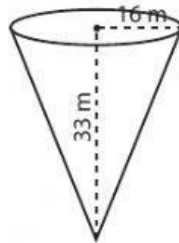
Volume = \_\_\_\_\_

4)



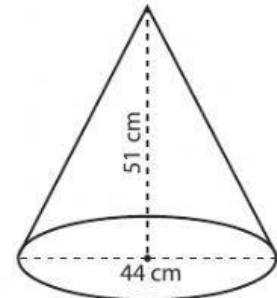
Volume = \_\_\_\_\_

5)



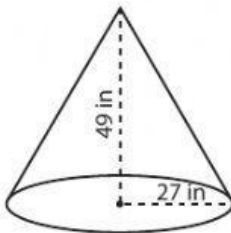
Volume = \_\_\_\_\_

6)



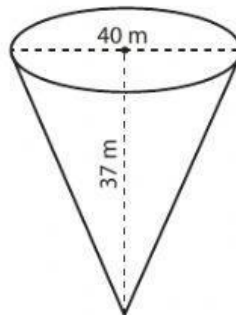
Volume = \_\_\_\_\_

7)



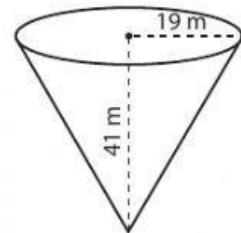
Volume = \_\_\_\_\_

8)



Volume = \_\_\_\_\_

9)



Volume = \_\_\_\_\_

10) A conical flask has a diameter of 20 centimeter and a height of 18 centimeter. Find the volume of air it can occupy.

Volume = \_\_\_\_\_