



Term 1 Examination

Subject: Science

Year 2

Name:

Date:

READ THE FOLLOWING INSTRUCTIONS:

You may use a black OR blue pen

The number of marks is given in brackets [] at the end of each question

The total number of marks for this paper is: 50

This document contains 13 pages to be completed

Science 2

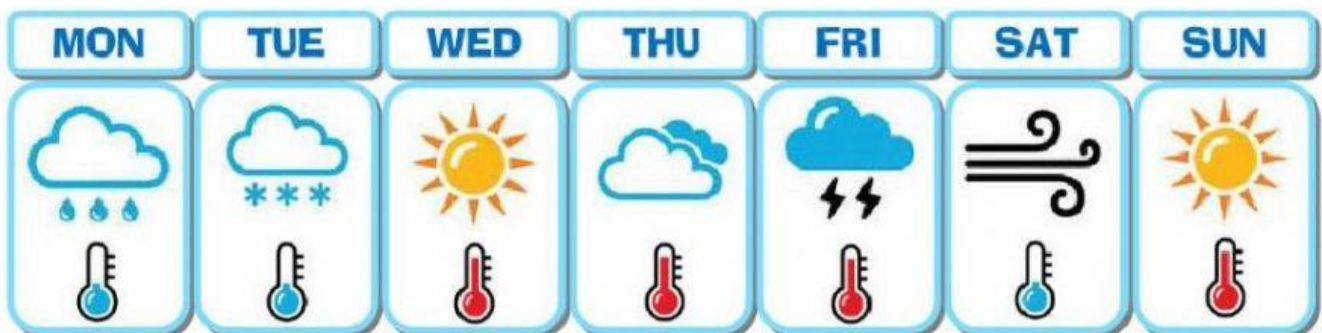
1. Look at the picture below and identify if it is an example of living thing or non-living thing.



- A. Living Thing
- B. Non-Living Thing

....[1]

2. Study the weather forecast below.



On Sunday, the weather forecast will be _____.

- A. Sunny
- B. Stormy
- C. Rainy

....[1]

Science 2

3. What symbol best describe the weather forecast below?



4. This weather instrument is used to measure the precipitating rain in a given amount of time per unit.


- A. Wind vane
- B. Rain gauge
- C. Satellite

....[1]

5. Choose which of the following pictures below an example of non-living thing is.



....[1]








6. Animals such as lizard, snakes and tortoises like to bask in the sun.

- A. True
- B. False
- C. Either A or B
- D. Both A and B

....[1]

Science 2

7. Study the weather forecast below.

Monday	Tuesday	Wednesday	Thursday	Friday
				
30° 25°	31° 27°	38° 32°	42° 37°	45° 39°

What will the weather be like on Friday?

- A. Snowy
- B. Cloudy
- C. Windy

....[1]

8. The sentences below are the descriptions of where the worms live except for one.



- A. Worms can be found in hot and dry environment.
- B. Worms can be found in shady environment.
- C. Worms can be found in wet environment.

....[1]

9. Which of the following observations would help to identify a living thing?

- A. It grows.
- B. It cannot move on their own.
- C. It cannot make young ones.

.....[1]

Science 2

10. Here are some living things we see can around.



frog



centipede



chameleon

Write each living thing in the correct box in the table.

tree	log	soil	pond	beach

....[3]

11. Tick the correct sentences and cross out the false statement.

☐

Cloud is an example of a non-living moving thing.

☐

We can measure the amount of rainfall using a thermometer.

☐

We should throw litter anywhere.

....[3]

12. Which of the following is an example of a living thing?

A.



B.



C.



....[1]


Science 2

13. What do we call the weather instrument in the picture?



- A. Thermometer
 - B. Anemometer
 - C. Windsock
-[1]

14. Study the weather forecast below.



Today is Wednesday; the weather is _____ and _____.
....[2]

Science 2

15. Some things are living things.

Others have never lived.

Write down each word in the correct box in the table.

pen

lion

computer

donkey

LIVING THINGS	NON-LIVING THINGS
1.	1.
2.	2.
3.	3.

....[4]

16. Which of these sentences is correct about scorpion?

- A. Scorpion can be found in hot and dry environment.
- B. Scorpion can be found in shady and wet environment.
- C. Scorpion can be found in dry and shady environment.

....[1]

Science 2

17. What symbol best describe the weather forecast below?



....[1]

18. This weather instrument is used to tell the wind direction. It lets you know what direction the wind is coming from.

- A. Anemometer
- B. Wind vane
- C. Rain gauge

....[1]

19. Why is it important to protect the environment?

- A. Many living things may not be able to find food, keep safe of have young if environment is made dirty.
- B. To trap the turtle in the net.
- C. For the trees to be cut down and birds lose their homes.

....[1]

Science 2

20. What can you do on a sunny day?

- A. Splash in puddles
- B. Play board games indoor.
- C. Play shadow tag or swim in the pool.

....[1]

21. We can measure the air temperature using a _____.

- A. Wind vane
- B. Anemometer
- C. Thermometer

....[1]

22. The following are the common living things can be found in the garden except for one.

A.



....[1]

B.



C.



23. What type of weather is in the picture below?



A. Sunny day

B. Stormy day

C. Rainy day

....[1]