





SECTION 1 | Test 1




Schofield & Sims

A Answer




- Count the sticks. How many?  _____
- $3 + 6 =$ _____
- $7 - 2 =$ _____
- $5p + 2p + 1p =$ _____ p
- $9p - 6p =$ _____ p
- $8 = 5 +$  _____
- $4 \times 1 =$ _____
- $5 = 9 -$  _____
- $2 + 2 + 2 + 2 =$ _____

10  What time is it? _____ o'clock

B Answer

- Find the total number of dots.  and _____
- Take 0 from 7. _____
- Write the word for the missing number.
3, 5, , 9 _____
- Four more than five _____
- How many must be taken from 5 to leave 3? _____
- To eight add zero. _____
- What number equals double 2? _____
- From 6 subtract 3. _____
- Find the difference between 3 and 8. _____
- Which of these numbers is an odd number?
 _____

C Answer

- Write the word for the number that comes between 6 and 8. _____
- Lucy has 7p and she spends 4p. How much has she left? _____ p
- Which is the shortest line?
A, B or C?
A 
B 
C 

- Jack is 9 years old and Emily is 3 years younger. How old is Emily? _____
- By how much is 7p more than 3p? _____ p
- Anu has one 5p and one 2p. How much are these coins worth altogether? _____ p
- A line is 6cm long. By how many centimetres is it shorter than another line 8cm long? _____ cm
- Gita has two 2ps and four 1ps. How much money has she altogether? _____ p

- Which is the third letter in the row?
 _____

10  Daniel gets to school 2 hours later than the time on this clock. At what time does he arrive? _____ o'clock