

Cambridge Primary Programme

Name: Class: Date:

Homework

Money and Time

A. Solve the word problems.

1. I have two 25 cent coins, one 50 cent coin and one 1 dollar coin.

How much do I have?

Ans:

2. I have 52 cents. I bought a candy for 25 cents. How much do I have left?

Ans:

3. I have two 25 cent coins, twelve 1 cent coins. How much do I have?

Do I have enough money to buy the 80 – cent handbook?

Ans:

4. My mom had 10 dollars. She bought two cupcakes for 3 dollars, a pack of candy for 5 dollars. How much did she have left?

Ans:

5. I bought a notebook for 15 cents, 2 pencils, each pencil is 4 cents.

How much did I spend?

Ans:

6. My mom gave me 1 dollar, four 10 cent coins, six 5 cent coins.

How much did my mom give me?

Ans: _____

7. I have 85 cents. How much do I need to make 1 dollar?

Ans:

8. I sell a cup of lemonade for 8 cents. I sold 10 cups today. How much did I get?

Ans:

9. I have nine 1 cent coins, six 5 cent coins, two 25 cent coins. How much do I have?

Ans:

10. Cinema tickets cost \$4 each, a box of popcorn is \$1 and milkshake costs 50 cents.



a. Susie buys four tickets. How much does she pay?

Ans:

b. Josh buys a box of popcorn and two milkshakes.

How much does Josh spend altogether?

Ans:

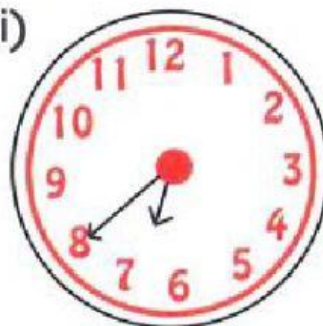
B. Write down the time shown on each of these clocks.

(i)



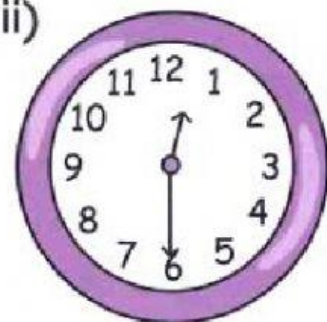
.....

(ii)



.....

(iii)



.....

(iv)



(v)



(vi)



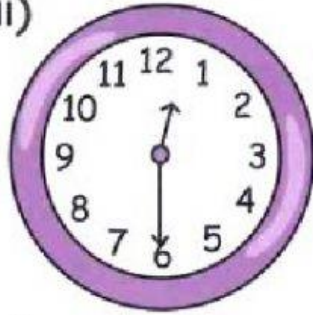





.....

.....

.....

C. For each clock, draw clocks to show the time 10 minutes before and 5 minutes after the time shown.

| Time shown | 10 minutes before | 5 minutes after |
|---|-------------------|-----------------|
| (i)  | | |
| (ii)  | | |
| (iii)  | | |
| (iv)  | | |

| | | |
|---|--|--|
| (v)  | | |
| (vi)  | | |