


Mathematics Homework



Solid Figures (3D Shapes)

Total(13pts)

Instructions: Draw the line from each solid shape to its name.

sphere



cube




cone



rectangular
prism



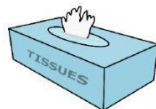
pyramid



cylinder



Select the objects that can roll.



Select the objects that can stack.



Which object can not slide ?

