

SOCIAL SCIENCE UNIT 6: THE ROMAN CONQUEST

NAME: \_\_\_\_\_

GROUP: \_\_\_\_\_

1. ORDER THE WORDS TO MAKE SENTENCES.

a) IN 753 BC      FOUNDED      ROME      WAS      IN ITALY

---

b) TERRITORIES    THE MEDITERRANEAN    THEY    AROUND    CONQUERED    SEA

---

\_\_\_\_\_, IN WHAT WE KNOW  
AS EUROPE, IN ASIA AND IN THE NORTH OF AFRICA.

c) EMPIRE      THE      ROMAN      ENDED      IN 476 AD

---

d) LASTED      ROMAN      THE      FOR      1229 YEARS      EMPIRE

---

e) THE FALL      ROMAN      OF THE      EMPIRE      THE YEAR      OF

---

\_\_\_\_\_, IS ALSO  
CONSIDERED THE END OF THE ANCIENT HISTORY.

2. WRITE TRUE OR FALSE.

- a) The Romans arrive to Ampurias through the Mediterranean Sea in 258 BC
- b) The Romans conquered first the west of the peninsula.
- c) Finally, they won the tribes in the north of the peninsula in 19 BC.
- d) It took the Romans almost 300 years to conquered the whole peninsula.

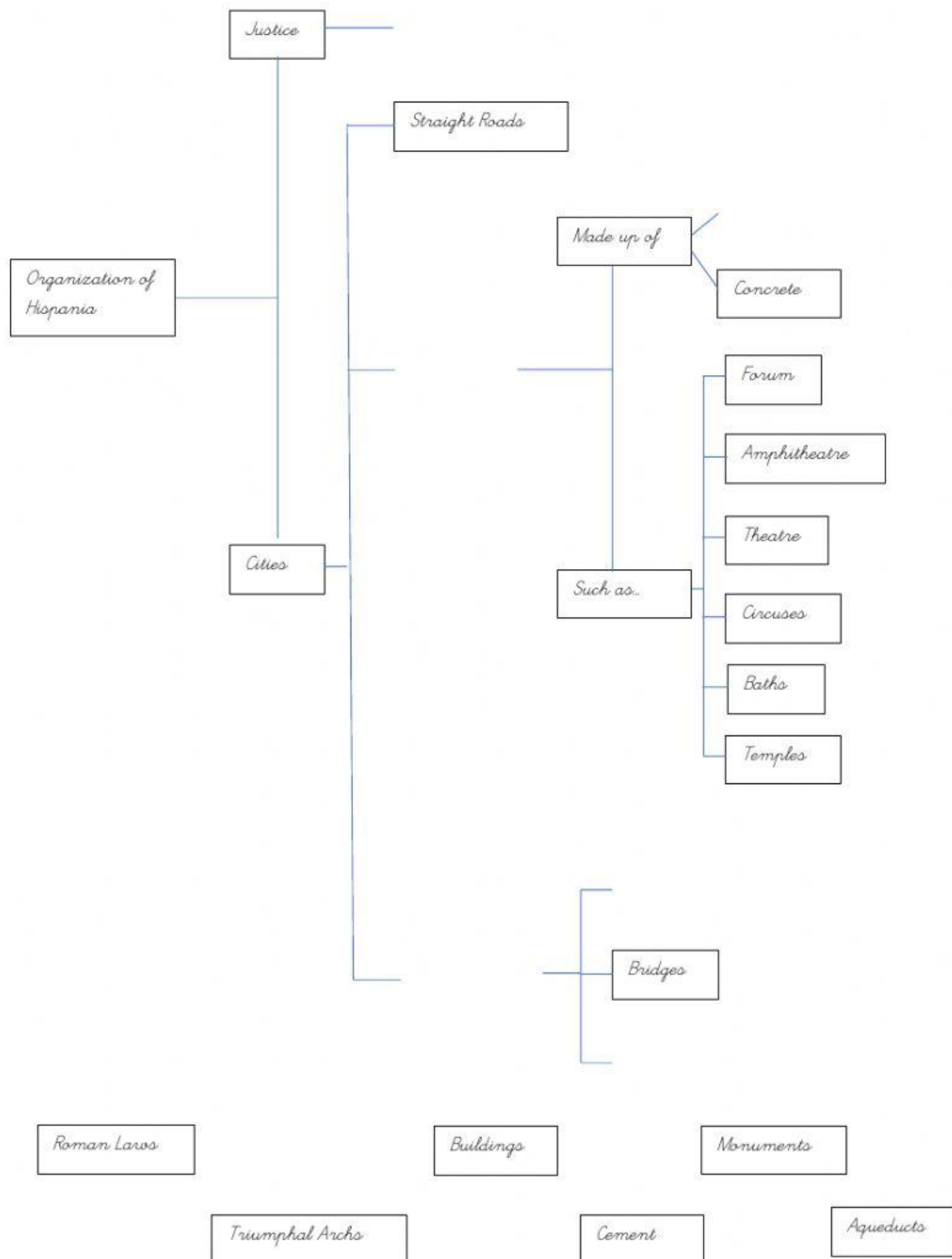
3. CHOOSE THE CORRECT OPTIONS.

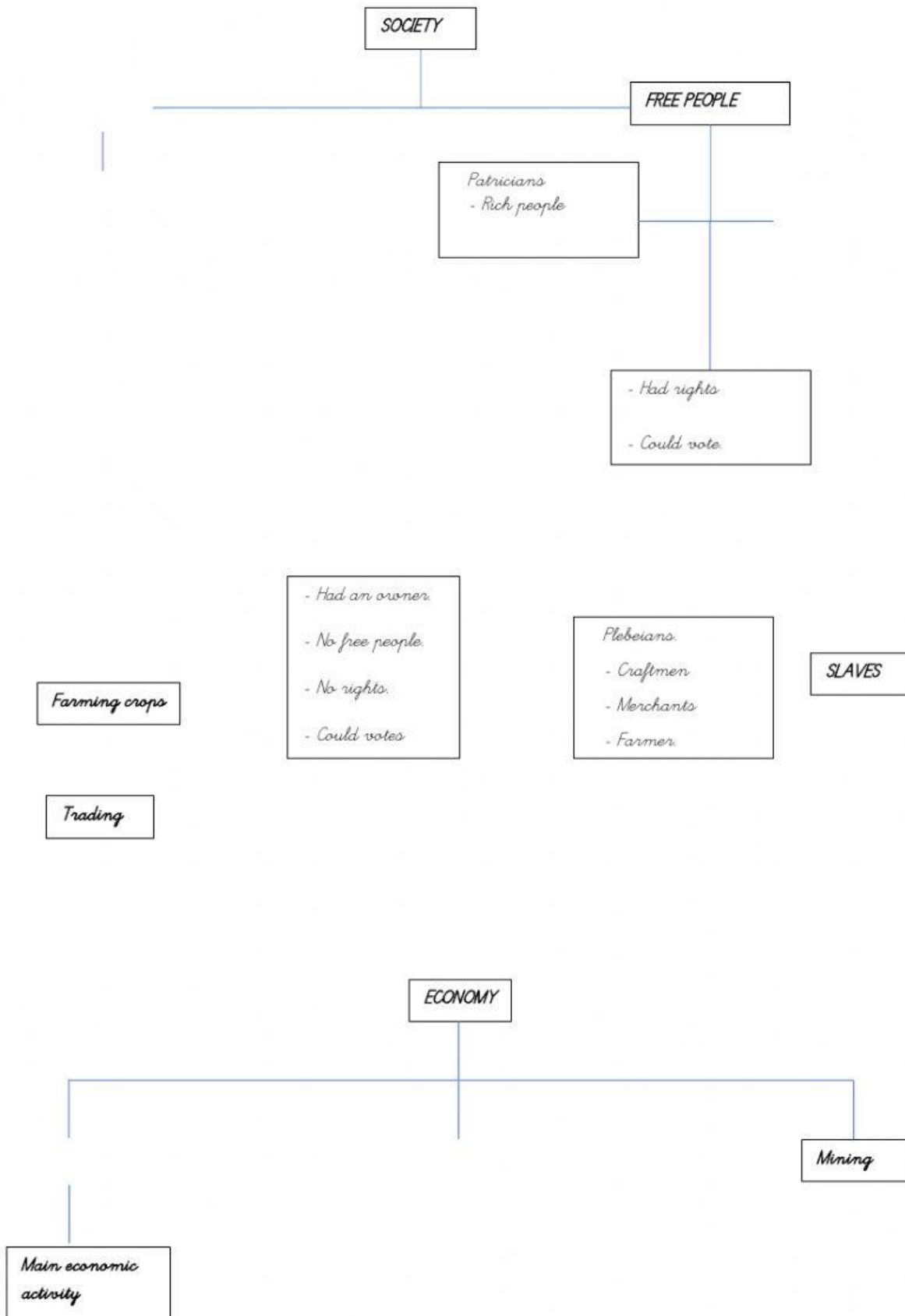
Once the Romans had the power over all the peninsula, they named it \_\_\_\_\_.

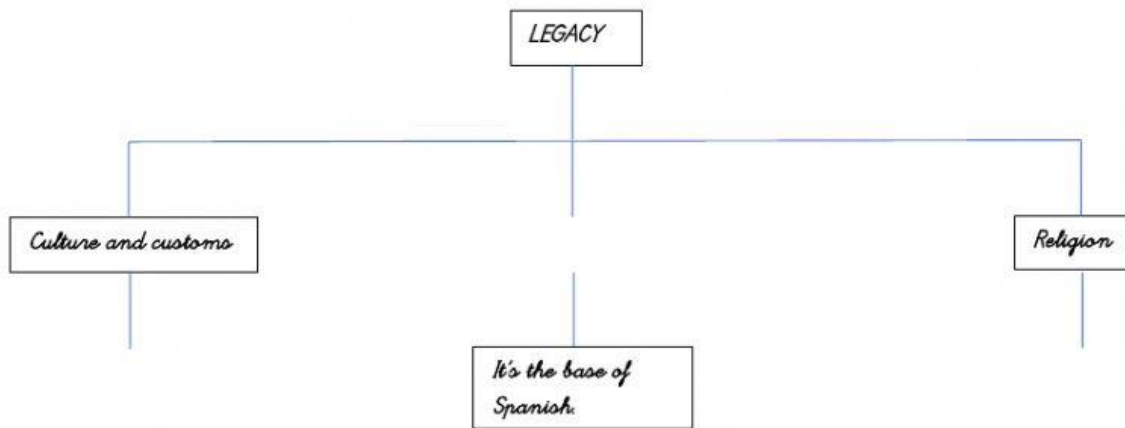
They also divided the territory into \_\_\_\_\_ provinces: Gallaecia, Tarraconensis, Lusitania, \_\_\_\_\_.

Each province was ruled by a \_\_\_\_\_.

4. COMPLETE THE FOLLOWING DIAGRAMS.







Great influence in the future.

Latin

- Bronze and marble
- To decorate buildings

Conversion to Christianity

- To decorate walls

Frescos

