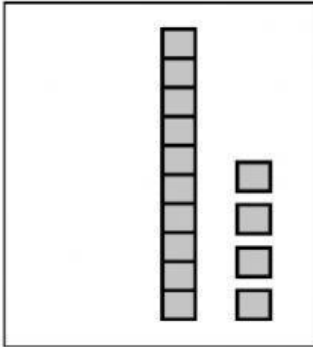


Tens and Ones

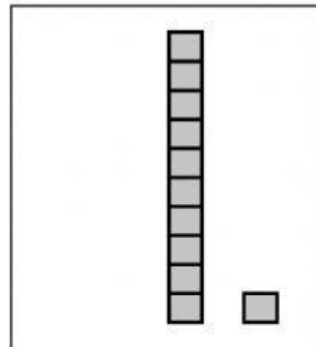
Write how many.



Tens	Ones

Number

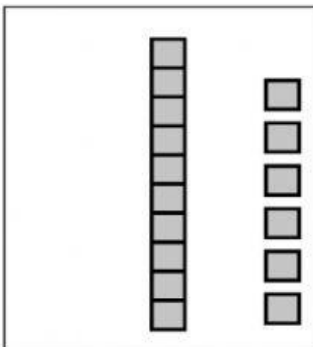
--



Tens	Ones

Number

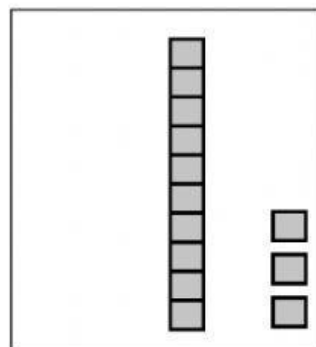
--



Tens	Ones

Number

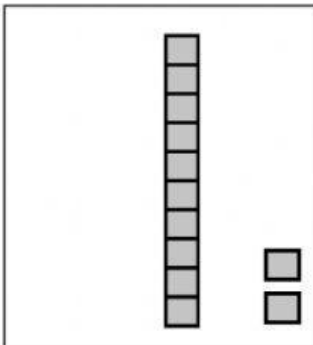
--



Tens	Ones

Number

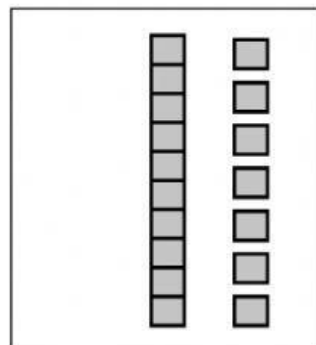
--



Tens	Ones

Number

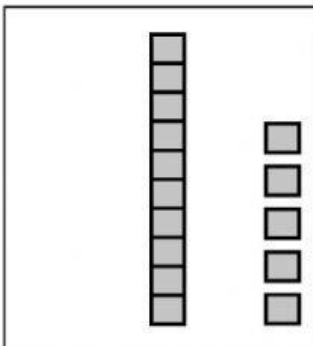
--



Tens	Ones

Number

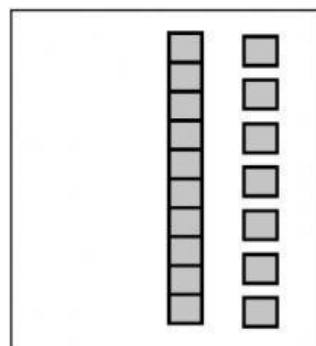
--



Tens	Ones

Number

--



Tens	Ones

Number

--

Ordering Numbers 1-20

Write the numbers in order from least to greatest.

17	8	13	—			
----	---	----	---	--	--	--

19	16	5	—			
----	----	---	---	--	--	--

14	9	12	—			
----	---	----	---	--	--	--

15	3	4	—			
----	---	---	---	--	--	--








16	5	11	—			
----	---	----	---	--	--	--

18	1	6	—			
----	---	---	---	--	--	--

20	2	12	—			
----	---	----	---	--	--	--

13	10	7	—			
----	----	---	---	--	--	--

Comparing Numbers- Word Problems

1	<p>Tim has 8 </p> <p>Tommy has 3 </p> <p>How many fewer candies does Tommy have?</p>	<p>Tommy has _____ fewer  than Tim.</p>
2	<p>Alan has 7 </p> <p>Molly has 6 </p> <p>How many more chocolates does Alan have?</p>	
3	<p>Sara has 10 </p> <p>Eric has 4 </p> <p>How many fewer hearts does Eric have?</p>	