

Mathematics
Time of Day/Time to the Hour Checkpoint

Directions: Look at the pictures. Draw the line to the time of the day for each activity.






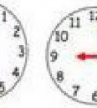
morning afternoon evening night







Choose the correct answer.



Drag the clock to its correct time.

					
1:00	6 o'clock	3:00	9 o'clock	seven o'clock	twelve o'clock

Look at each clock, type the time on the digital clocks.

			
<div style="border: 1px solid black; width: 60px; height: 20px; display: flex; align-items: center; justify-content: center;">:</div>	<div style="border: 1px solid black; width: 60px; height: 20px; display: flex; align-items: center; justify-content: center;">:</div>	<div style="border: 1px solid black; width: 60px; height: 20px; display: flex; align-items: center; justify-content: center;">:</div>	<div style="border: 1px solid black; width: 60px; height: 20px; display: flex; align-items: center; justify-content: center;">:</div>

Solve the word problems.

Sam put the cake in the oven. When he looked at the clock the minute hand was on 12, and the short hand was on 5.
What time was it? _____ o'clock

The pink flamingos put on a show every two hours. The first show was at 10:00. At what time is the next show?
_____ : _____