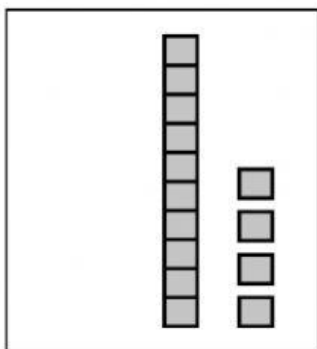


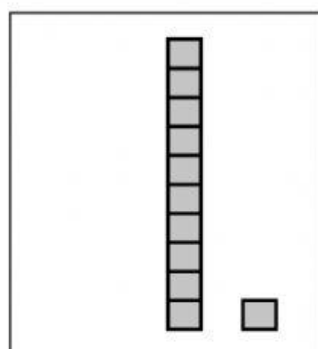
# Tens and Ones

Write how many.



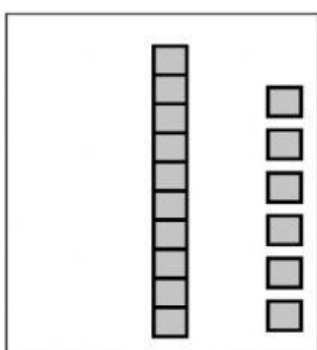
Tens	Ones

Number



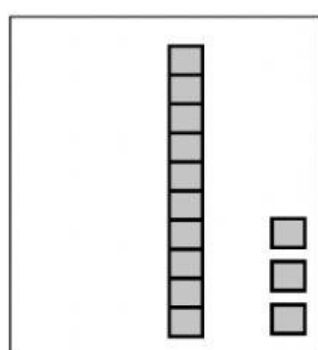
Tens	Ones

Number



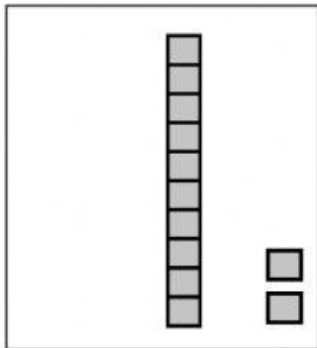
Tens	Ones

Number



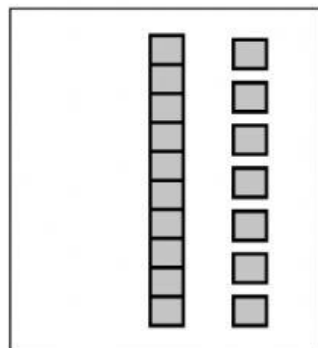
Tens	Ones

Number



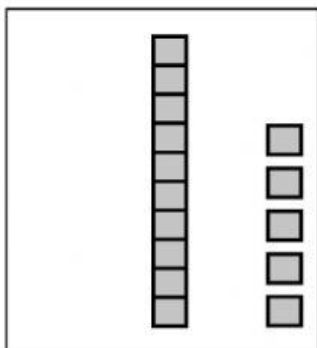
Tens	Ones

Number



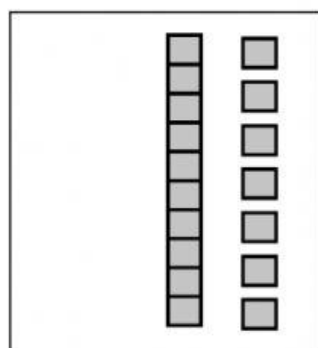
Tens	Ones

Number



Tens	Ones

Number



Tens	Ones

Number

# Ordering Numbers 1-20

Write the numbers in order from least to greatest.

17	8	13	—			
----	---	----	---	--	--	--

19	16	5	—			
----	----	---	---	--	--	--

14	9	12	—			
----	---	----	---	--	--	--

15	3	4	—			
----	---	---	---	--	--	--

16	5	11	—			
----	---	----	---	--	--	--

18	1	6	—			
----	---	---	---	--	--	--

20	2	12	—			
----	---	----	---	--	--	--

13	10	7	—			
----	----	---	---	--	--	--

## Comparing Numbers- Word Problems

1	Sally has 5 valentines. Sue has 10 valentines. How many more valentines does Sue have?	Sue has _____ more valentines than Sally.
2	Tim has 8 candies. Tommy has 3 candies. How many fewer candies does Tommy have?	Tommy has _____ fewer candies than Tim.
3	Sara has 10 hearts. Eric has 4 hearts. How many fewer hearts does Eric have?	Eric has _____ fewer hearts than Sara.
4	Alan has 7 chocolates. Molly has 6 chocolates. How many more chocolates does Alan have?	Alan has _____ more chocolates than Molly.
5	Amanda has 11 valentines. Rose has 6 valentines. How many fewer valentines does Rose have?	Rose has _____ fewer valentines than Amanda.