



# RECOGNISE 2-D SHAPES

## Activity 1

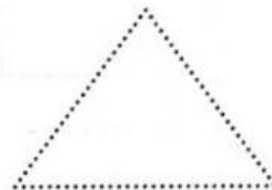
1 Join all the dots and write the name of the 2-D shapes.

a




--	--	--	--	--	--	--	--	--	--

b



--	--	--	--	--	--	--	--	--	--

c



--	--	--	--	--	--	--	--	--	--

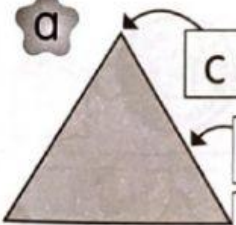
d



--	--	--	--	--	--	--	--	--	--

2 Complete the sentences.

a




c	o	n	r
---	---	---	---

s	t			i	h
---	---	--	--	---	---

s		d
---	--	---

b



c		r	v	d
---	--	---	---	---

s		d
---	--	---

c




	o	r	e
--	---	---	---

s				i		t
---	--	--	--	---	--	---

s			e
---	--	--	---

d



--	--	--	--	--	--	--

--	--	--	--	--	--	--	--

--	--	--	--

## Activity 2

1 Match.


a



•

3 straight sides

b



•

4 straight sides


c



•

4 equal straight sides

d



•


1 curved side

2 Tick (✓) the objects that has the same surface.


a



b



c



d

