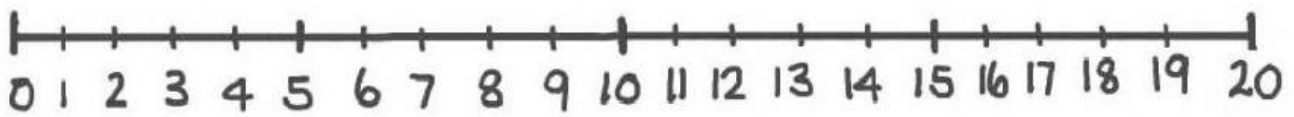


Subject	Unit	Lesson	Type of Sheet
Mathematics	14	3 & 4	Homework
Name:		Y 1 -	Date:


Q1. Count along the number line to double the numbers.



a. Double of 2 =

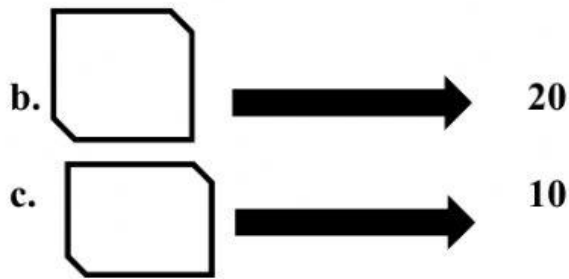
b. Double of 4 =

c. Double of 0 =







Q2. Which number has been doubled?

a.  → 12



Q3. Double the number.

- a. **Double 7** = 
- a. **Double 0** = 
- b. **Double 9** = 
- c. **Double 5** = 



Q4. Ali is saying that double of 0 is zero but Ahmed is saying that double of 0 is 1. Who is correct? Type the name in the box.

Ahmed Or Ali

