


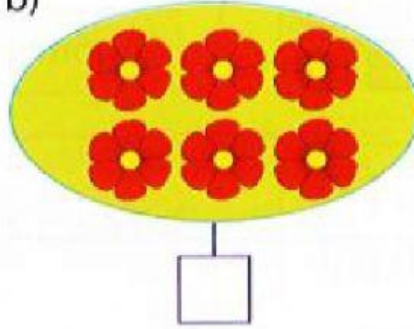
PHIẾU ÔN TẬP CUỐI TUẦN 7

1. SỐ ?

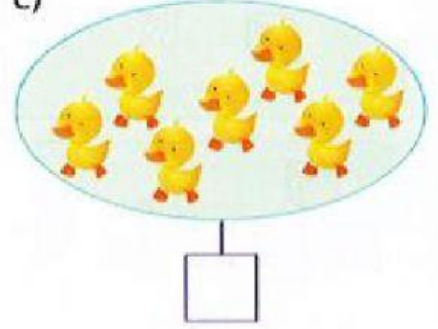
a)



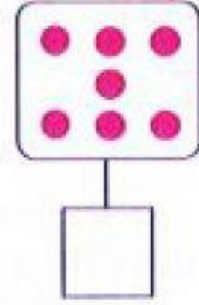
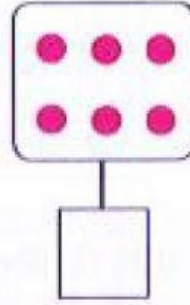
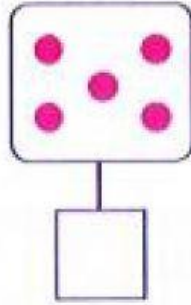
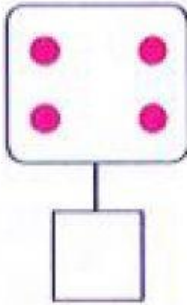
b)



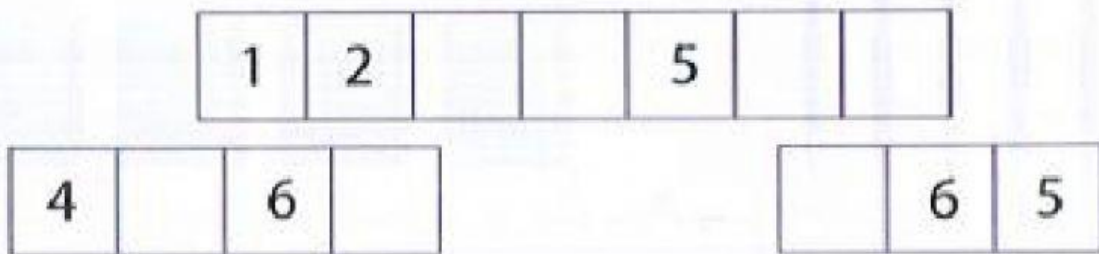
c)



2. SỐ ?



3. SỐ ?



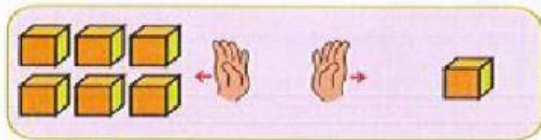
4. > < =

$$\begin{array}{l} 2 \square 1 \\ 4 \square 6 \\ 3 \square 7 \end{array}$$

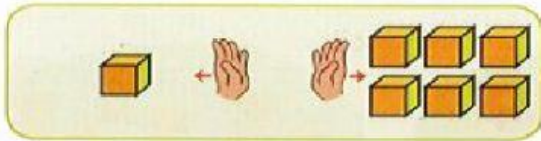
$$\begin{array}{l} 7 \square 3 \\ 4 \square 4 \\ 3 \square 5 \end{array}$$

$$\begin{array}{l} 1 \square 7 \\ 6 \square 5 \\ 7 \square 7 \end{array}$$

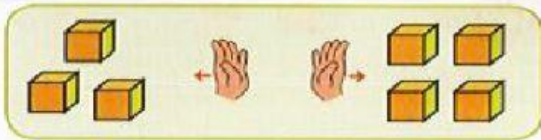
5. Nối (theo mẫu)



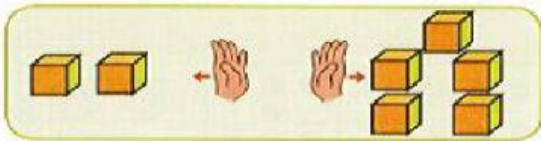
7 gồm 1 và 6



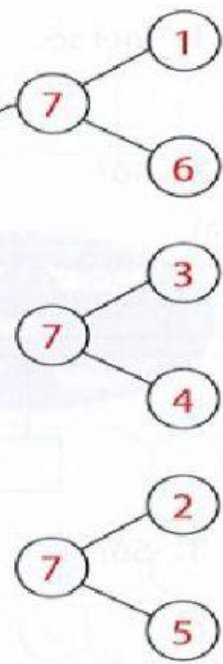
7 gồm 6 và 1



7 gồm 2 và 5



7 gồm 3 và 4



6. iu/ươ/êu




đ bé



quả



7. ao /au



đi



r



s



nhà