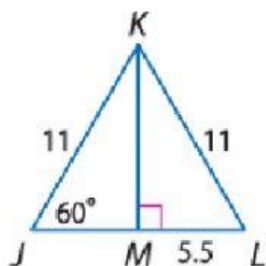


Name:

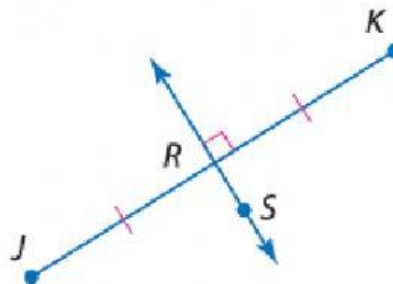
Date:

### Lesson: Triangle Bisectors

Determine the missing measurements and angles:

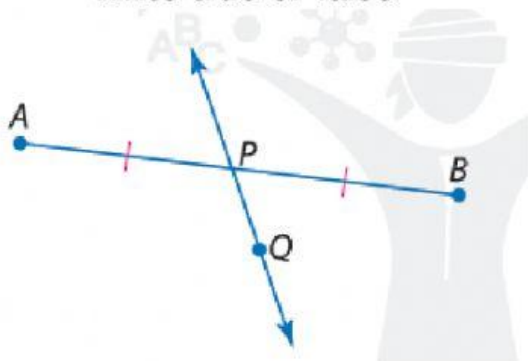


$JM =$



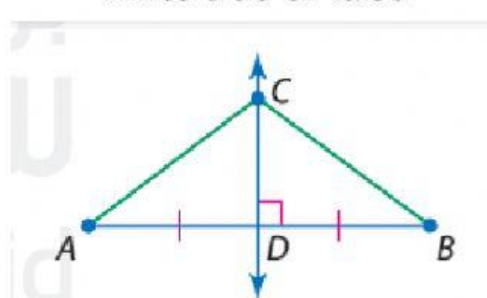
Line  $RS$  is called a

Write true or false

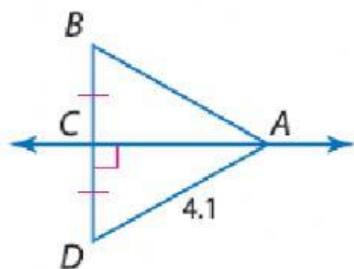


Line segment  $AP =$  line segment  $BP$

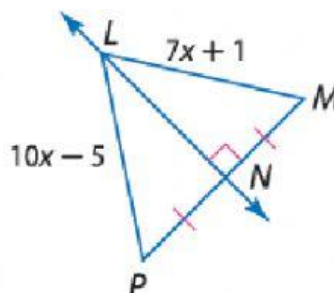
Write true or false



Line segment  $AC =$  line segment  $BC$   
because  $CD$  is a perpendicular bisector.



$AB =$



$x =$

$LP =$

$LM =$