



LEIA PUUDUV ARV

Millised arvud lapsed mõtlesid?



a =	b =	m =	k =	n =
-----	-----	-----	-----	-----

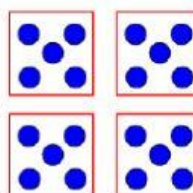
Vali õige vastus



4×6

6×3

4×5



$40 : 5$

4×5

$20 : 10$

5×6

Mis meid varsti ees ootab?

Lahendussõna saamiseks kirjuta tabelis oleva vastuse kohale õige täht.

64	17	71	52	35	46	17	49	81	63	46	48

Arvuta peast.

$28 - 11 = A$

$85 - 14 = L$

$65 + 16 = D$

$62 - 16 = N$

$42 - 7 = E$

$39 + 25 = T$

$60 - 12 = G$

$16 + 33 = U$

$47 + 16 = I$

$71 - 19 = V$