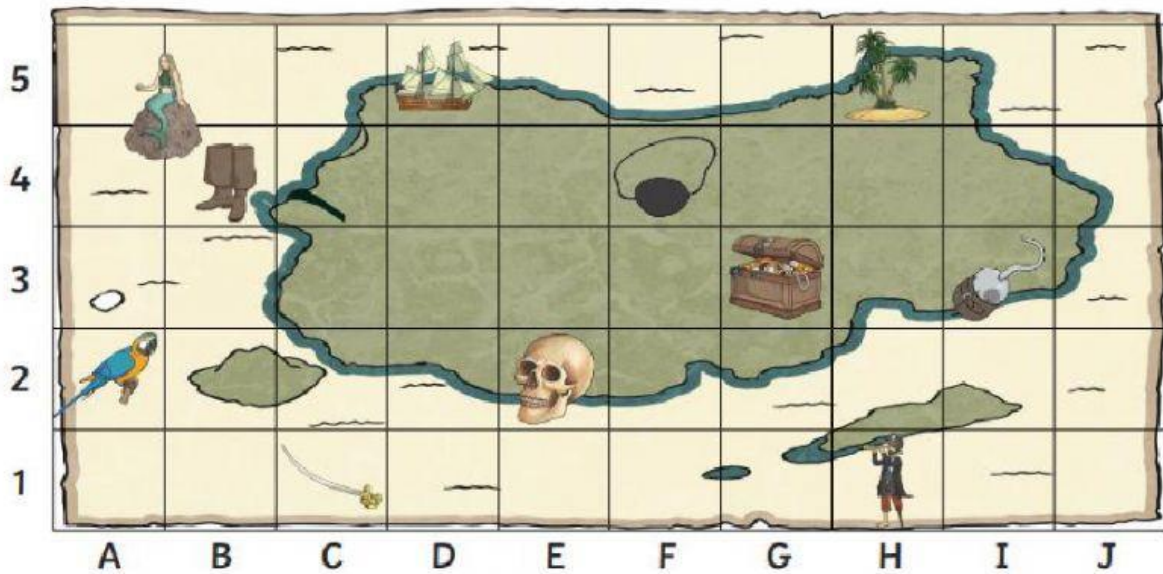


Week 11 – Lesson 4



What object is at each of these grid references on the pirate map?

(E2) = \_\_\_\_\_


(H5) = \_\_\_\_\_


(A2) = \_\_\_\_\_


(H1) = \_\_\_\_\_


(C1) = \_\_\_\_\_


Write the grid reference for each of these items on the pirate map:

 = (       )

 = (       )

 = (       )

 = (       )

 = (       )