


Mathematics Year 1
Unit 6: Length, Mass and Volume of Liquid

Name : _____

Class : _____

A. Solve the problems.

- 1 The pictures below show the mass of a papaya and a pineapple.



Compare the mass of the papaya and pineapple.
Which one is heavier?

- 2 The length of  is 6  .
The length of  is 4  .
Which is longer,  or  ?





I am taller than Linda.

I am shorter than Kumar.
I am taller than Linda.



Kumar

Linda

Zain

Who is the tallest?


Who is the shortest?

The tallest :

The shortest :



Look at the pictures. What can you put into the pencil case?




	Ruler
	Pen
	Glue

Tick your answer:

<input type="checkbox"/>	Ruler
<input type="checkbox"/>	Pen
<input type="checkbox"/>	Glue

5







Look at the pictures above. Compare the mass of the jackfruit, pumpkin and watermelon. Determine the lightest and the heaviest fruit.

The lightest fruit :

The heaviest fruit :

6

Aminah pours  into a few . Her sister drinks 2 . Her friends drink 4 .

How many glasses can  fill?




is equal to



.

B. Complete the letters. What is Nabil's ambition?



a High sandcastle.

b Long bench.

c Short tree.

d Heavy rock.


e Light pail.

















f A bottle full of water.

Nabil's ambition is to be a

--	--	--	--	--	--

C. Complete the sentences below.



- a The length of  is equal to .
- b The length of  is equal to .
- c The length of  is than the .
- d The volume of  is than the .
- e The volume of  is than the .
- f The mass of  is equal to .
- g The mass of  is equal to .
- h The mass of  is than the .