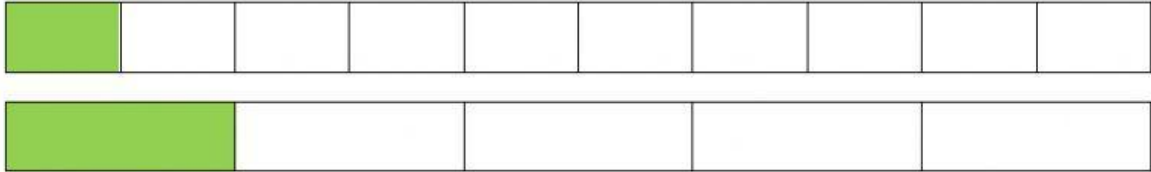



1. Compare the fractions below using comparison symbols:

<	for "smaller than"
>	for "greater than"
=	for when the numbers/fractions are the same

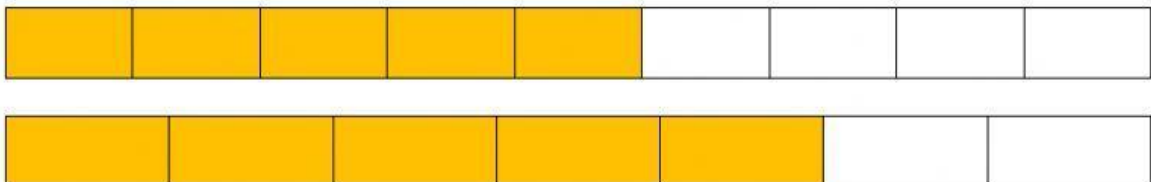
a) $\frac{1}{10}$ ○ $\frac{1}{5}$




b) $\frac{2}{3}$ ○ $\frac{2}{6}$



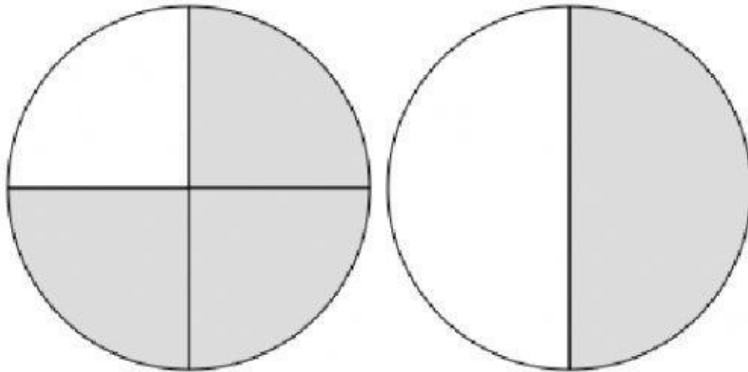
c) $\frac{5}{9}$ ○ $\frac{5}{7}$




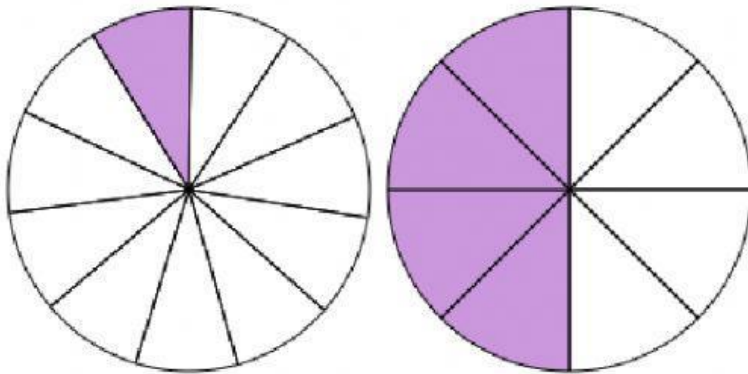
d) $\frac{2}{4}$ ○ $\frac{4}{8}$



e) $\frac{3}{4}$  $\frac{1}{2}$



f) $\frac{1}{12}$  $\frac{4}{8}$



2. Order the fractions below in ascending order:

_____ , _____ , _____



$\frac{2}{6}$



$\frac{1}{10}$



$\frac{5}{7}$