

Anglo American School
Math Quiz #2
II Semester



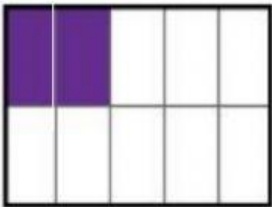
Name: _____

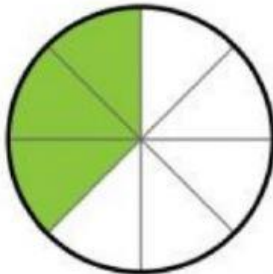
Assessment	
*Understands and applies basic properties related to numbers (fractions). (Part 1 A-B)	
*Understands and applies basic concepts and properties related to measurement. (Part 1 C-D)	

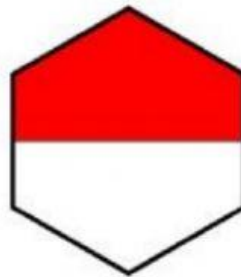
Observations:

Part1. NUMBERS

A. What fraction of each shape is shaded? Fill in the blanks.





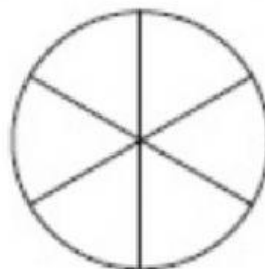




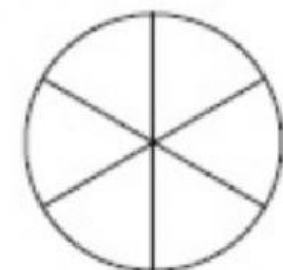
B. Color to show each fraction.



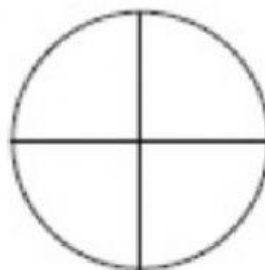
$$\frac{3}{5}$$



$$\frac{2}{6}$$



$$\frac{5}{6}$$



$$\frac{1}{4}$$


C. Fill in the blanks. Write the fraction to make 1 whole.

a. 

$\frac{5}{9}$ and _____ make 1 whole.

b. 

$\frac{5}{12}$ and _____ make 1 whole.



$\frac{2}{7}$ and _____ make 1 whole.



$\frac{8}{10}$ and _____ make 1 whole.

D. Compare the fraction. Fill in the blank with greater than or least than using the symbols $>$, $<$.

$$\frac{1}{2} \bigcirc \frac{1}{8}$$

$$\frac{1}{3} \bigcirc \frac{1}{2}$$

$$\frac{1}{10} \bigcirc \frac{1}{4}$$

$$\frac{1}{3} \bigcirc \frac{1}{5}$$