














Foundation Department
Lesson 1: Plant and animal life cycles

Name: _____ Grade/Section: _____ Date: _____

Life Science
Plant Life Cycle

Match the picture with the part of the plant life cycle.

<p>Fruit</p> 		<p>Seed</p> 		<p>Sprout</p> 	
					
					
<p>Flower</p> 				<p>Seedling</p> 	
		<p>Plant</p> 