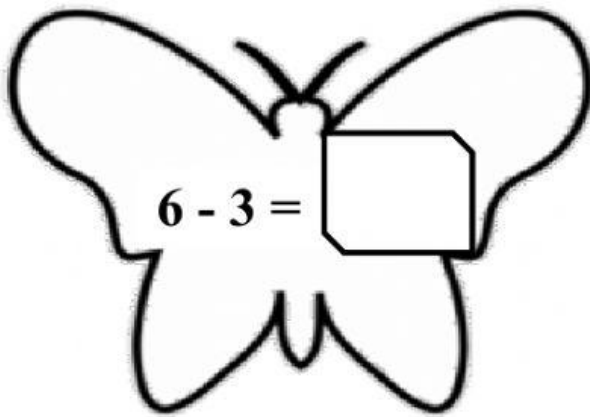


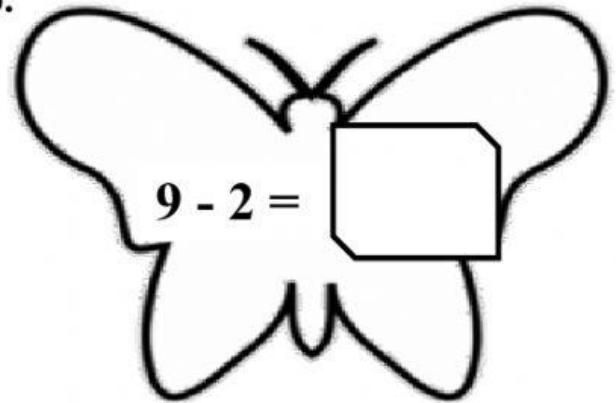
Subject	Unit	Lesson	Type of Sheet
Mathematics	11	1 & 2	Homework
Name:		Y 1 -	Date:

**Q1. Use different strategies to solve subtractions.**

a.

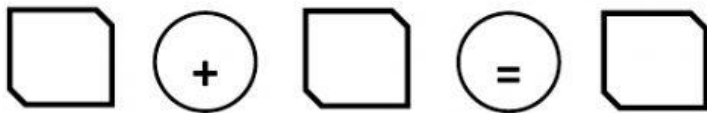


b.



**Q2. Write the number sentences for these additions and subtractions.**

a. We ate 7 muffins. Then, we ate 2 more. How many muffins did we eat altogether?



b. Alex had 9 books. He read 4 of them. How many books does Alex have left to read?

$$\square - \square = \square$$

Q3. There are 6 cakes on a plate at the party for 4 children. Each of them had a piece. How many cakes are left on the plate?

$$\square - \square = \square$$

Q4. I saw 4 kittens. Then I saw 3 more behind the tree. How many kittens are there altogether?

$$\square + \square = \square$$

