
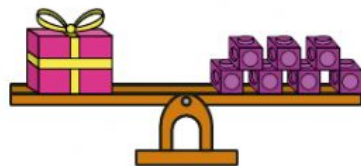


Compare mass

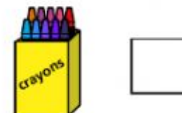
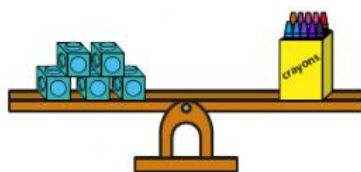
I Which object is heavier?

Tick your answer.

a)



b)



c)



2 Look at the scales.



Choose a word to complete each sentence.

heavier

lighter

- a) The orange is _____ than the cherries.
- b) The apple is _____ than the orange.
- c) The cherries are _____ than the apple.
- d) The apple is _____ than the cherries.

3 The basketball is heavier than the football.

Draw cubes to complete the scales.



Is there more than one answer?