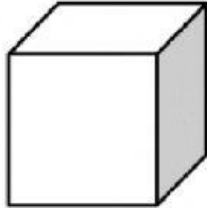
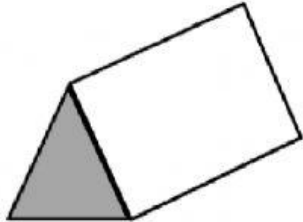
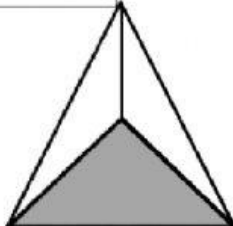

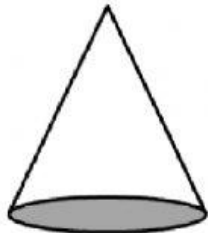
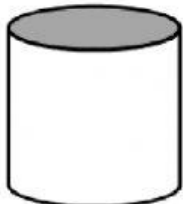
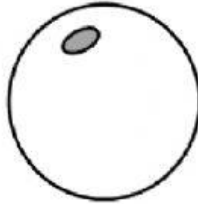
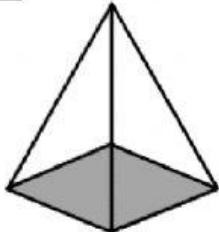


Fill in the name, and number of faces, edges and vertices for each shape.

<p><b>CUBE</b></p> <p>Faces:</p> <p>Edges:</p> <p>Vertices:</p> 	<p><b>PRISM</b></p> <p>Faces:</p> <p>Edges:</p> <p>Vertices:</p> 
<p><b>TRIANGULAR PYRAMID</b></p> <p>Faces:</p> <p>Edges:</p> <p>Vertices:</p> 	<p><b>CUBOID</b></p> <p>Faces:</p> <p>Edges:</p> <p>Vertices:</p> 
<p><b>CONE</b></p> <p>Faces:</p> <p>Edges:</p> <p>Vertices:</p> 	<p><b>CYLINDER</b></p> <p>Faces:</p> <p>Edges:</p> <p>Vertices:</p> 
<p><b>SPHERE</b></p> <p>Faces:</p> <p>Edges:</p> <p>Vertices:</p> 	<p><b>SQUARE PYRAMID</b></p> <p>Faces:</p> <p>Edges:</p> <p>Vertices:</p> 



cylinder      square pyramid  
cube              sphere

triangular pyramid      cuboid  
triangular prism          cone

