




SOLVE IT

Activity 1

Solve the problems below.

- 1 Raju finished his homework at 8:05 in the evening. State the time in words.



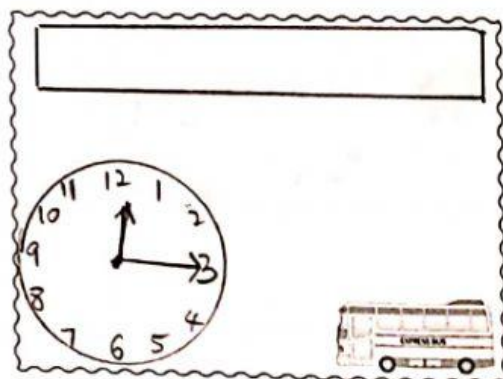
- 2 Mona started her colouring at 3 o'clock. When she finished colouring, the minute hand was at 9. What time did she finish her colouring?




- 3 The clock shows the time of arrival of a bus in Kuala Lumpur. What is the time after a quarter of an hour?



Arrival
time



- 4 The prefects' meeting started at 9 o'clock in the morning. The meeting ended after 35 minutes. State the time when the meeting ended.





SELF-ASSESSMENT

Match.

