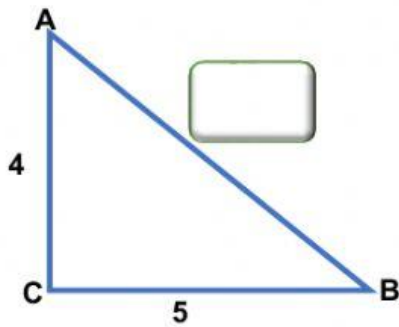
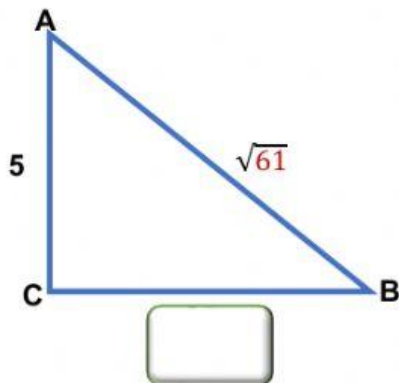


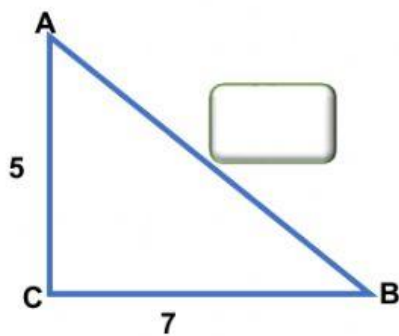
Calcule el lado desconocido de los triángulos rectángulos, arrastre al cuadro la respuesta correspondiente.



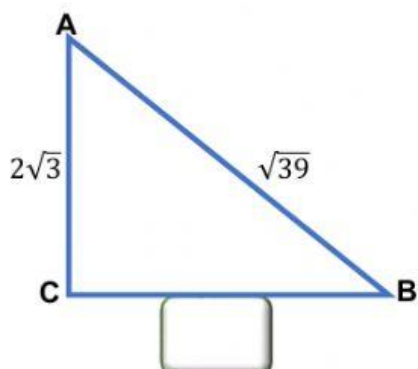
- $\sqrt{41}$
- $\sqrt{3}$
- $\sqrt{13}$



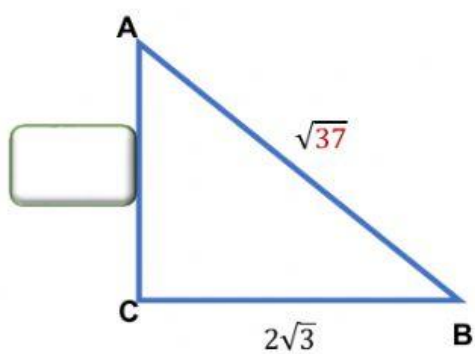
- $\sqrt{36}$
- 56
- 6



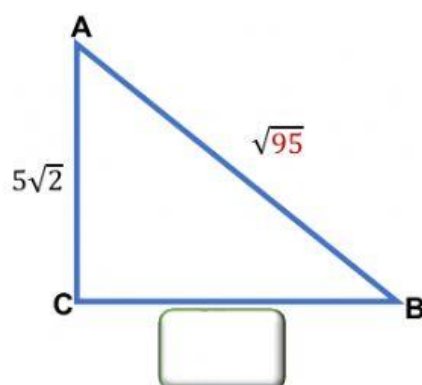
- $\sqrt{24}$
- 12
- $\sqrt{74}$



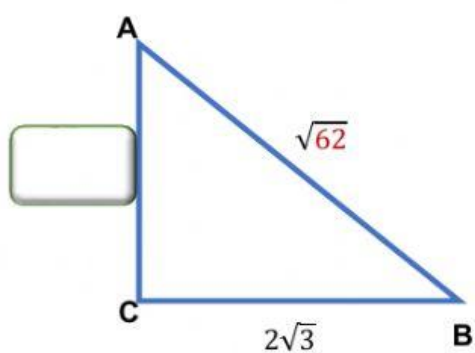
- $5\sqrt{3}$
- $4\sqrt{3}$
- $3\sqrt{3}$



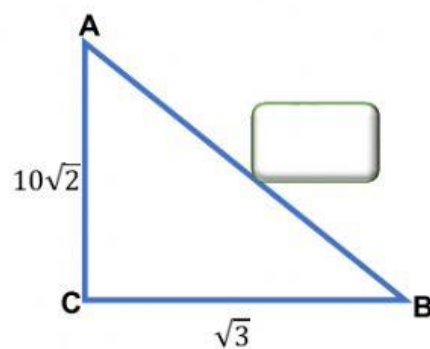
- 5 25 20



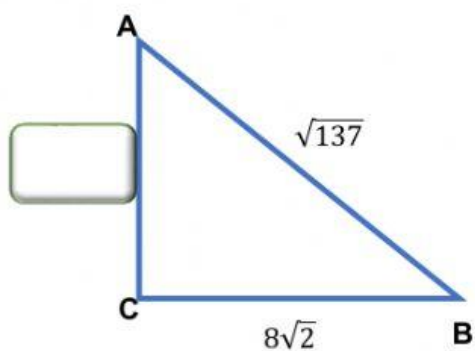
- $3\sqrt{7}$ $2\sqrt{5}$ $3\sqrt{5}$



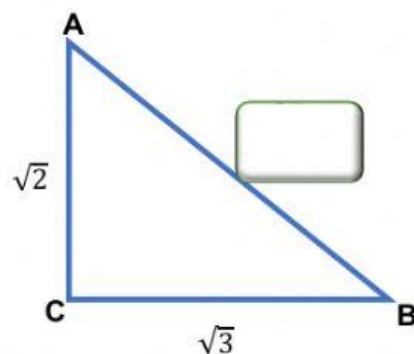
- $5\sqrt{6}$ $5\sqrt{5}$ $5\sqrt{2}$



- $3\sqrt{203}$ $2\sqrt{203}$ $\sqrt{203}$



- 6 3 2



- $\sqrt{5}$ $2\sqrt{5}$ 5